

Dot-to-Dot

Name: _____

Count by 2s. What is this? _____

50



48

6

4

46

44

10

8

42

40

38

36

34

30

28

26

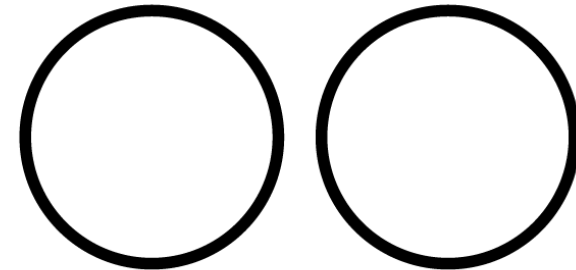
24

20

18

16

14



12

32

30

24

22

Patchwork Math

Name: _____


Color the picture of the flag of China, using the colors beside the numbers below.

5 = green

6 = black

7 = yellow

8 = purple



What hidden picture did you find?


soldier

movie


Which Is Greater?

Name: _____


- Count the items in each row. Place the number in the box.
- Place a checkmark in the small box next to the number that is greater.




Number	Which is greater?
<input type="text"/>	<input type="checkbox"/>




<input type="text"/>	<input type="checkbox"/>
----------------------	--------------------------




<input type="text"/>	<input type="checkbox"/>
----------------------	--------------------------




<input type="text"/>	<input type="checkbox"/>
----------------------	--------------------------




<input type="text"/>	<input type="checkbox"/>
----------------------	--------------------------



<input type="text"/>	<input type="checkbox"/>
----------------------	--------------------------



<input type="text"/>	<input type="checkbox"/>
----------------------	--------------------------




<input type="text"/>	<input type="checkbox"/>
----------------------	--------------------------

Which Is Less?

Name: _____

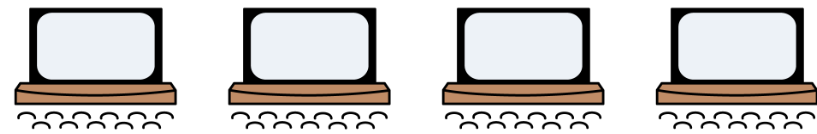
1. Count the items in each row. Place the number in the box.
2. Place a checkmark in the small box next to the number that is less.



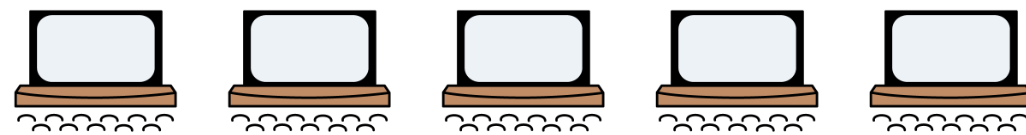
Number	Which is less?
<input type="text"/>	<input type="checkbox"/>



<input type="text"/>	<input type="checkbox"/>
----------------------	--------------------------



<input type="text"/>	<input type="checkbox"/>
----------------------	--------------------------




<input type="text"/>	<input type="checkbox"/>
----------------------	--------------------------




<input type="text"/>	<input type="checkbox"/>
----------------------	--------------------------



<input type="text"/>	<input type="checkbox"/>
----------------------	--------------------------



<input type="text"/>	<input type="checkbox"/>
----------------------	--------------------------



<input type="text"/>	<input type="checkbox"/>
----------------------	--------------------------